



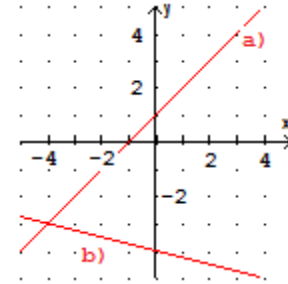
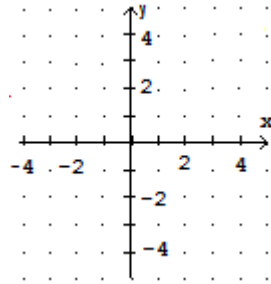
Klapptest – Funktionen zeichnen 2

Falte zuerst das Blatt entlang der Linie und löse danach die Aufgaben.

1. Zeichne die Geraden:

a) $y = x + 1$

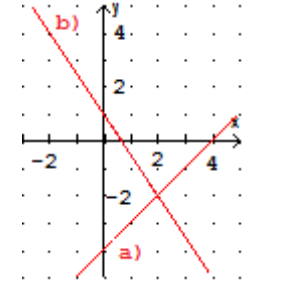
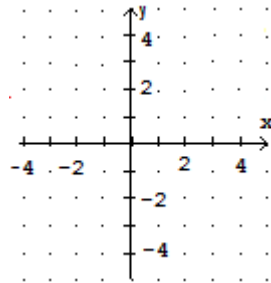
b) $y = -0,25x - 4$



2. Zeichne die Geraden:

a) $y = x - 4$

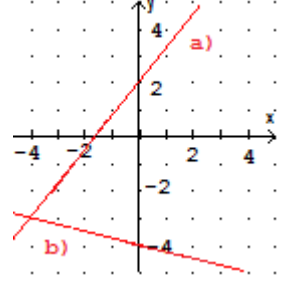
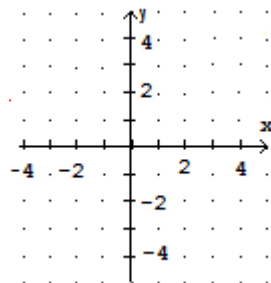
b) $y = -1,5x + 1$



3. Zeichne die Geraden:

a) $y = 1,25x + 2$

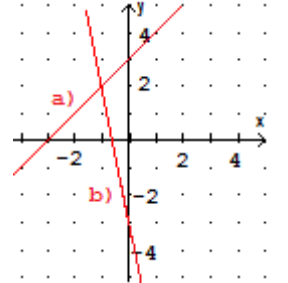
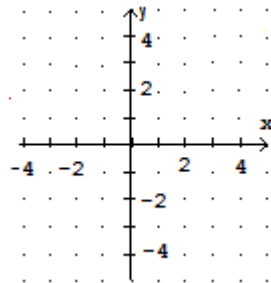
b) $y = -\frac{1}{4}x - 4$



4. Zeichne die Geraden:

a) $y = -5x - 3$

b) $y = x + 3$



Ergebnis:

/ 8 P.